



INDIAN SCHOOL AL WADI AL KABIR
DEPARTMENT OF MATHEMATICS (2023 – 2024)

CLASS: I



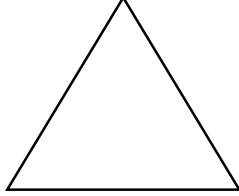

TOPIC: SHAPES

WORKSHEET - 1

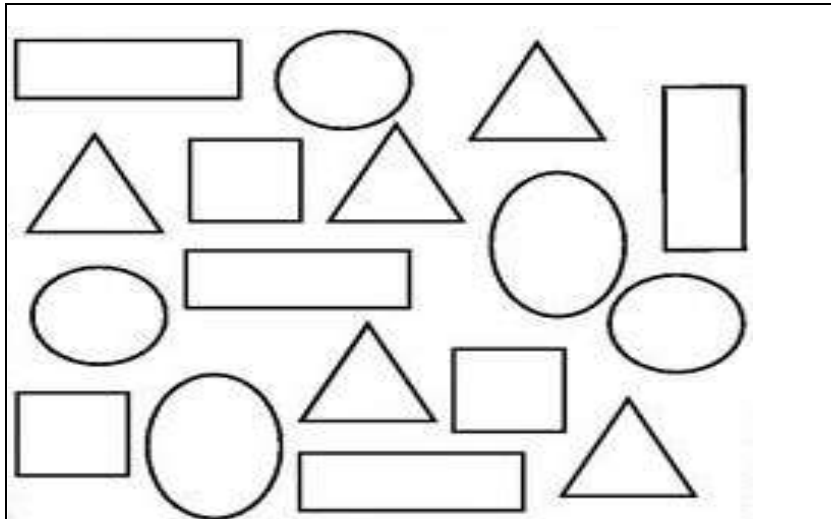
RESOURCE PERSON: SABINA.D

NAME: _____ SEC: _____ DATE: _____



Q1. Write the names of the shapes.

			
R _____	C _____	T _____	S _____

Q2. Identify the shapes that have more than 3 sides and colour it.



Q3. Draw objects using the following lines.

<p>Curved line</p> 	<p>Straight line.</p> 
---	---



INDIAN SCHOOL AL WADI AL KABIR

DEPARTMENT OF MATHEMATICS (2023 – 2024)

CLASS: I

TOPIC: SHAPES






WORKSHEET - 2

RESOURCE PERSON: SABINA.D

NAME: _____

SEC: _____ DATE: _____

Q1. Match the names of the shapes to the objects.

a	square	1	
b	rectangle	2	
c	circle	3	
d	oval	4	
e	triangle	5	

Answers: a _____, b _____, c _____, d _____, e _____.

Q2. Fill in the blanks.

- A circle is made up of a _____ line.
- A triangle has _____ sides and _____ corners.
- A square has _____ sides and _____ corners.
- A rectangle has its opposite sides _____.
- An egg is _____ in shape.

Q3. Help Browne find his home while walking through the shapes.

